

PROJECT WORK

SESSION 2024-25

CLASS - III (THREE)


PROJECT WORK (SUBMISSION DATE: 1st July, 2024)

ENGLISH LANGUAGE

(Total Marks : 20)

Question 1) Look at the pictures and circle the correct word-

[8]




(a) ruler / rulers



(e) house / houses



(b) button / buttons



(f) cow / cows



(c) van / vans



(g) jug / jugs



(d) book / books



(h) flower / flowers

Question 2) Complete the pairs with masculine or feminine nouns-

[6]

- (a) brother and _____
- (b) cow and _____
- (c) man and _____
- (d) king and _____
- (e) son and _____
- (f) mother and _____

Question 3) Match the columns to complete the sentences-

[4]

- | | |
|-----------|----------------------------|
| (a) Why | (i) book do you want? |
| (b) Which | (ii) are you crying? |
| (c) Where | (iii) is your best friend? |
| (d) Who | (iv) are you from? |

Note: 1/2 mark is for each: Index, Acknowledgement, Bibliography and Neatness of the project



ENGLISH LITERATURE

(Total Marks : 20)

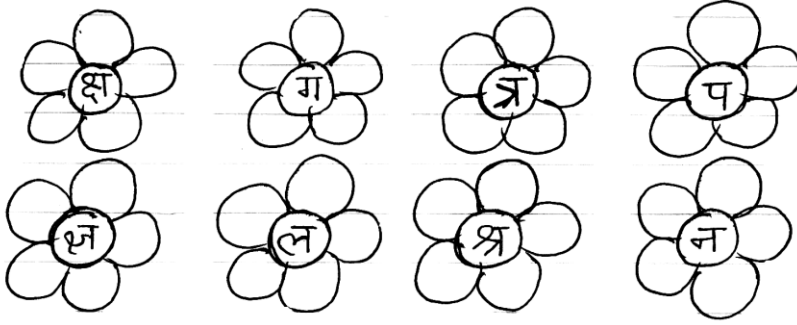
Question 1) Write eight lines of the poem- 'From a Railway Carriage' and paste a picture relevant to it. [10]**Question 2)** Make sentences of the following given words-

[8]

- (a) handsome -
 (b) proud -
 (c) engaged -
 (d) stairs -
 (e) instead -
 (f) advisor -
 (g) scholar -
 (h) confident -

Note: 1/2 mark is for each: Index, Acknowledgement, Bibliography and Neatness of the project**HINDI LANGUAGE**

(Total Marks : 20)

प्रश्न सं. 1) संयुक्त व्यंजन वाले फूल बनाकर उनमें रंग भरिए तथा उनसे बने दो-दो शब्द लिखिए। (4)**प्रश्न सं. 2)** एक वर्ष में कितने महीने होते हैं? उनके नाम भी लिखिए। (6)**प्रश्न सं. 3)** 'मेरी प्रिय अध्यापिका' शीर्षक पर दस या बारह पंक्तियाँ लिखिए। (8)**Note:** ½ mark for each: Index (विषय सूची), acknowledgement (प्राक्कथन), bibliography (संदर्भ ग्रंथ सूची), neatness (स्वच्छता)**HINDI LITERATURE**

(Total Marks : 20)

प्रश्न सं. 1) भारत की किन्ही पाँच इमारतों के नाम लिखकर उनके चित्र भी चिपकाइए। (5)**प्रश्न सं. 2)** किन्हीं पाँच जानवरों के नाम लिखकर उनकी बोलियाँ बताइए तथा उनके चित्र भी चिपकाइए। (5)**प्रश्न सं. 3)** अपनी पाठ्य पुस्तक से कोई एक कविता लिखकर उससे संबंधित चित्र भी चिपकाइए। (8)**Note:** ½ mark for each: Index (विषय सूची), acknowledgement (प्राक्कथन), bibliography (संदर्भ ग्रंथ सूची), neatness (स्वच्छता)**MATHEMATICS**

(Total Marks : 20)

Question 1) Use the numbers from the given number grid and find the following answers. [8]

13	28	6	35	17
34	11	18	44	37
20	16	15	30	22

- (a) Find five pairs of different numbers that add up to 50.
 (b) Find three sets of different numbers that add up to 50.

Question 2) Find the place value of underlined digits and colour the numbers accordingly in the number grid. [8]

- (a) $\begin{array}{r} \underline{2}896 \\ 78\underline{6}5 \end{array}$ } **Red** (b) $\begin{array}{r} 198\underline{5}4 \\ 26\underline{4}31 \end{array}$ } **Green**
- (c) $\begin{array}{r} 886\underline{5}50 \\ 217\underline{4}23 \end{array}$ } **Yellow** (d) $\begin{array}{r} 4609\underline{1} \\ 964\underline{9}0 \end{array}$ } **Blue**

10	20	30	40	50	60	70	80	90
100	200	300	400	500	600	700	800	900
1000	2000	3000	4000	5000	6000	7000	8000	9000

Question 3)

- (a) Write the sum of smallest and largest 3-digit number. [2]
 (b) By how much is 9 less than 9998?

NOTE: ½ mark for each: Index, Acknowledgement, Bibliography and Neatness




SCIENCE

(Total Marks : 20)

- Question 1) Name the breathing organs of the following and paste related pictures- [5]
 (1) human
 (2) fish
 (3) insect
 (4) earth worm
 (5) plant
- Question 2) Draw any two internal body organs, which are found in pairs. Write their names too. [4]
- Question 3) Paste four different types of feathers of birds. [4]
- Question 4) Draw an insect and label its parts. [5]

Note: ½ marks for each Index, Acknowledgement, Bibliography, Neatness



SOCIAL STUDIES

(Total Marks : 20)

- Question 1) Name any six modern means of transport and paste their pictures. [6]
- Question 2) Name any four community helpers who wear uniform. Paste their pictures too. [4]
- Question 3) Draw or paste any four things we keep in our first aid box. [4]
- Question 4) List any four safety rules which should be followed at home. [4]

Note: ½ marks for each Index, Acknowledgement, Bibliography, Neatness



COMPUTER STUDIES


(Total Marks : 20)

- Question 1) Write the full form of the following: [4]
 (a) CRT →
 (b) RAM →
 (c) LED →
 (d) LCD →
- Question 2) Define these terms: [6]
 (a) Hardware
 (b) Software

Question 3) Explain IPO cycle. [4]

Question 4) Draw the picture of any 2 icons and colour it. [4]

Note: ½ mark for each index, acknowledgement, bibliography and neatness.



ART & CRAFT

(Total Marks : 20)

ART

Question 1) Draw a Madhubani Art by using sequins or mirrors.

CRAFT

Question 2) Make five flowers from common household supplies and recycled material.

COMMUNITY SERVICE

Question 3) Bring one First Aid Kit beautifully packed including following objects:

- (i) Dettol – 1 (Small)
- (ii) Band Aid – 5
- (iii) Cotton (1 Packet)
- (iv) Vicks / Iodex – 1 (Small)
- (v) Sanitizer – 1 (Small)

